

MODEL QUESTION PAPER FOR









ENTRANCE TEST OF

M.TECH. (UP) AND M.I.P. (INFRASTRUCTURE) 2015-16

100 questions for one mark each

Max. Time: Two Hours

1. Which among the following is an informal method of social control?
A. Customs B. Coercion
C. Law D. Education
2. Which of the following is the Garden City of India?
A. Pune
B. Surat
C. Bangalore
D. Allahabad
3. Blue Revolution is associated with –
A. Agriculture
B. Fishery
C. Poultry
D. None of the above
4. VAT is imposed
A) Directly on Consumer
B) On Final Stage of Production
C) On First Stage of Production
D) On all Stages between Production and Final Sale
5. Lines drawn parallel to the equator are called-
A. Latitude
B. Longitudes
C. Meridian
D. None of the above
6. If $2=0$, $3=3$, $4=6$, $5=9$, then $7=?$
A) 18 C) 12
B) 15 D) 16
7. Varun and Arun start from a fixed point. Varun moves 3km North and turns right and then covers 4km. Arun moves 5km West and turns right and walks 3km. The distance between Varun and Arun is:
A) 10 km C) 9 km
B) 9 km D) 6 km
8. The group which is more influential than family among the adolescents is _____.
A. Occupational group B. Peer group
C. Out-group D. Religion
9. The ratio of daily wages of two workers is 4:3 and one gets daily Rs 9 more than the other, what are their daily wages?
A. Rs 80 and Rs 60
B. Rs 60 and Rs 45
C. Rs 36 and Rs 27
D. Rs 32 and Rs 24
10. Which figure will replace the question mark

			
A	B	C	D
			
(1)	(2)	(3)	(4)

A.1
B. 2
C. 3
D.4